



Hi, I hope you all got on ok with yesterdays learning :)

Please don't forgot to access the links for fun maths games on our Class story if you can.

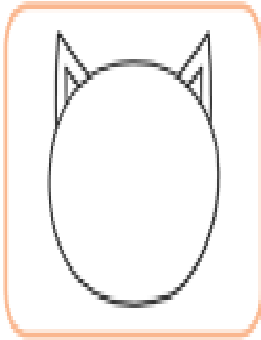
How to Draw a Cat



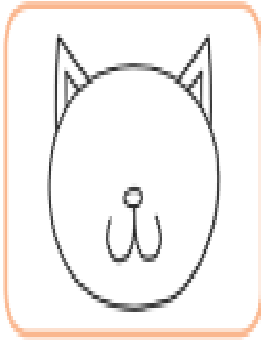
1




2




3



4



5



In Y3 you will aim to read at a fluency of 100 words in 1 minute. See if you can read this in 1 minute. Then try the questions that follow. You should re-read to search for the answers.

Troll's Troubles

2 Dear diary,

11 I love my little house underneath the bridge in

21 the valley but I get very grumpy when I hear

30 grubby, little goats trotting over the top of it

39 when I am trying to sleep. One morning, three

48 goat brothers made a plan to cross my bridge;

58 they knew it would make me cross. One at a

66 time, they bashed their hooves across the bridge.

77 When I went outside to tell them to be quiet, the

87 biggest goat pushed me with his horns and I fell

98 off the bridge into the river. I was furious! I think

103 I'm going to move house.

106 Dave the Troll



Quick Questions



1. Why does the troll get grumpy when people cross the bridge?



2. Number these events from 1 to 3 to show the order they happened in.

_____ The troll decided to move house.

_____ The three goats made a plan.

_____ The biggest goat pushed the troll.



3. Where does the troll live?



4. Find and copy two adjectives in the text which mean the same as 'angry'.

Section 1

Find the missing numbers:

$$15 + \square = 100$$

$$\square + 30 = 100$$

Section 2

What's my number? ?

I have 2 digits.

My tens digit = 30 - 10.

My ones digit is even, and is two less than 6.


Section 4

Make 17p using the fewest number of coins.



Section 5

What time is the clock showing?



Section 7

Write down 2 facts about triangles.

Section 3

I have 18 toy cars. I share them between my 2 friends. How many will they each have?



Section 6

Write these numbers in words:

13

25

11

Section 8

There are 24 apples in a box. Half are sold. How many are left?

